


Name _____

Date _____


Score # _____ correct x 4 = _____ %



Quadrilateral Classification Quiz

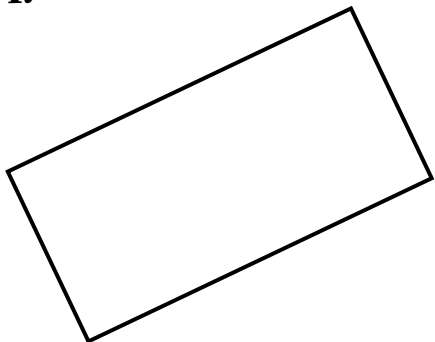
Decide if each polygon below is an example of the five types of quadrilaterals. Write **Y** for yes or **N** for no on the line next to each quadrilateral name. Each answer is worth 4 points.

C.



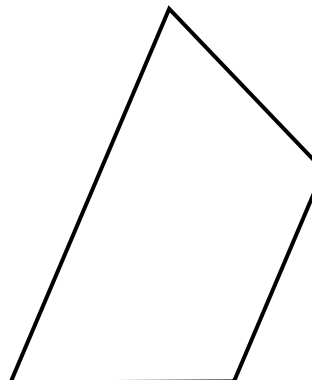
- _____ 11. square
- _____ 12. rectangle
- _____ 13. rhombus
- _____ 14. parallelogram
- _____ 15. trapezoid

A.




- _____ 1. square
- _____ 2. rectangle
- _____ 3. rhombus
- _____ 4. parallelogram
- _____ 5. trapezoid

D.



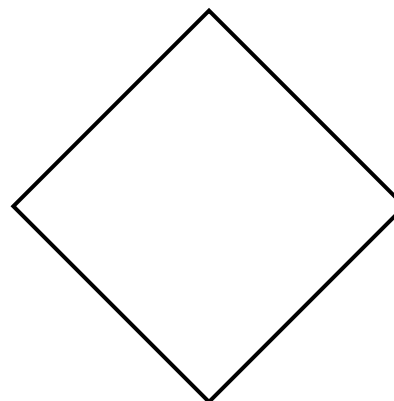
- _____ 16. square
- _____ 17. rectangle
- _____ 18. rhombus
- _____ 19. parallelogram
- _____ 20. trapezoid

B.



- _____ 6. square
- _____ 7. rectangle
- _____ 8. rhombus
- _____ 9. parallelogram
- _____ 10. trapezoid


E.




- _____ 21. square
- _____ 22. rectangle
- _____ 23. rhombus
- _____ 24. parallelogram
- _____ 25. trapezoid

Quadrilateral Classification

Quiz Answer Key



C.



Y 11. square

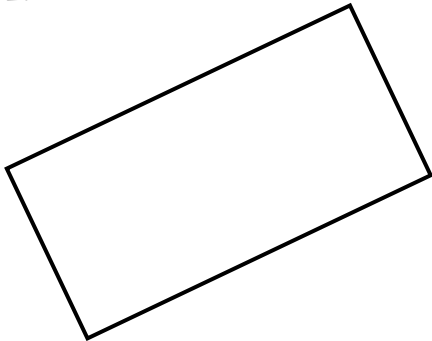
Y 12. rectangle

Y 13. rhombus

Y 14. parallelogram

N 15. trapezoid

A.



N 1. square

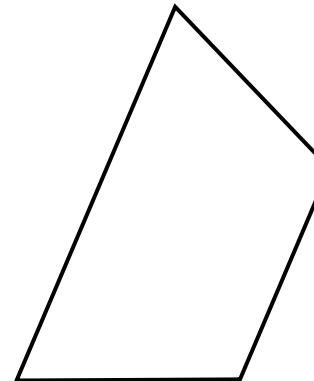
Y 2. rectangle

N 3. rhombus

Y 4. parallelogram

N 5. trapezoid

D.



N 16. square


N 17. rectangle

N 18. rhombus

N 19. parallelogram

Y 20. trapezoid

B.



N 6. square

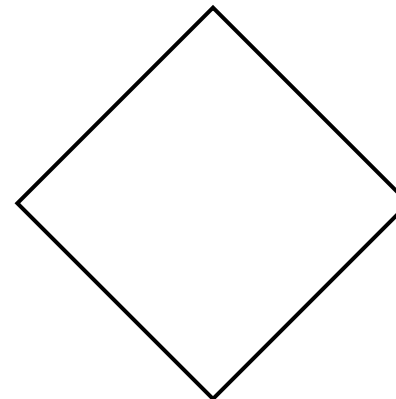
N 7. rectangle

N 8. rhombus

Y 9. parallelogram

N 10. trapezoid

E.



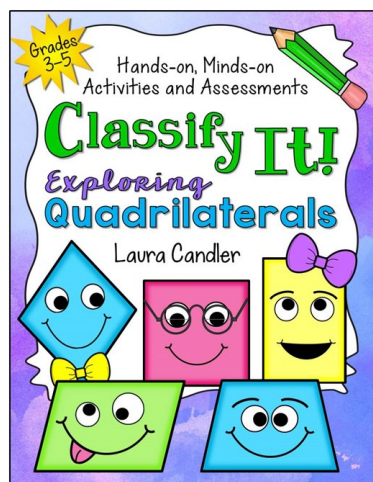
Y 21. square

Y 22. rectangle

Y 23. rhombus

Y 24. parallelogram

N 25. trapezoid



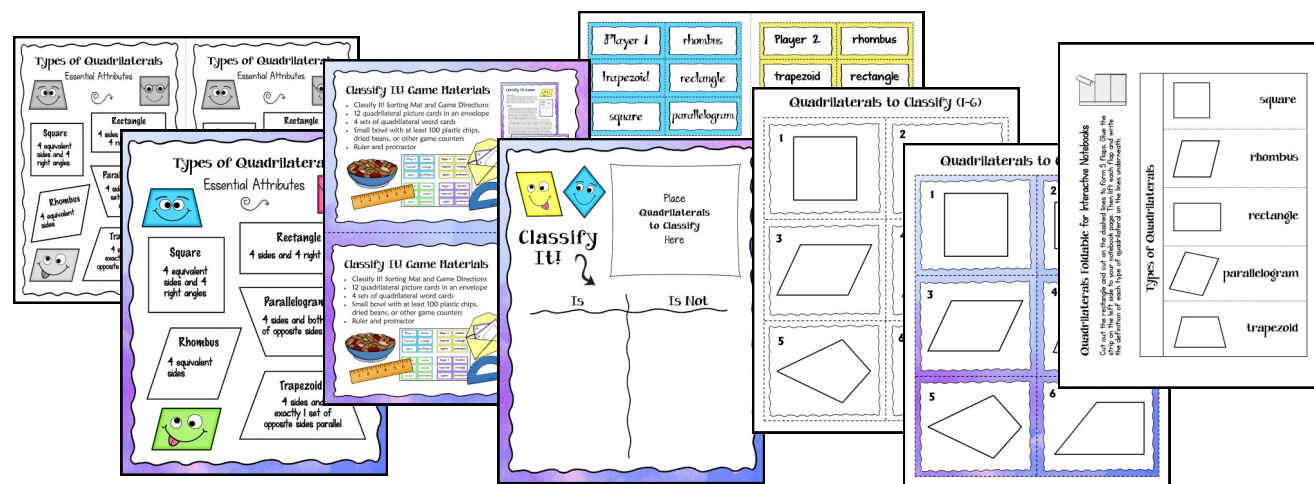
Click here to preview the entire product online!

What's Inside Classify It!

- Pretest and Posttest
- Mini lesson with printable on quadrilateral attributes
- Types of quadrilaterals poster and printable
- A foldable and an interactive notebook page
- 12 quadrilateral task cards and answers
- Hands-on sorting practice activity for teams or pairs
- Classify It! Math Game
- Student pages in black & white and color

A Note About Trapezoids: There are several definitions of a trapezoid, and the one used for this answer key considers a trapezoid to have exactly one set of opposite sides parallel. If your curriculum defines a trapezoid differently, you'll need to make your own key.

This **Classifying Quadrilaterals Quiz** freebie is the same as the pretest in **Classify It! Exploring Quadrilaterals**. The product also includes a similar test you can use as a posttest. If this test shows that your students have difficulty classifying quadrilaterals, check out the entire product. You'll find a quick mini-lesson, printables, quadrilateral task cards, a sorting activity, and an exciting game that will make quadrilaterals easy and fun! Click the **Classify It** cover on the left to find it on TpT, or click the preview link to see what's inside.



Classifying Quadrilaterals Quiz is protected by copyright, but it's a free item so it may be shared with others as long as the packet is kept intact and it's not sold. Copyright info and www.lauracandler.com must appear on each page. If you include a reference to the quiz online, please link to the it on my website. Thanks! ~ Laura Candler

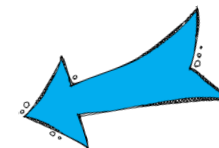
Website: www.lauracandler.com

Pinterest: www.pinterest.com/lauracandler

Facebook: www.facebook.com/teachingresources

TpT Store: www.teacherspayteachers.com/Store/Laura-Candler

Corkboard Connections Blog: www.corkboardconnections.com



Connect with me!